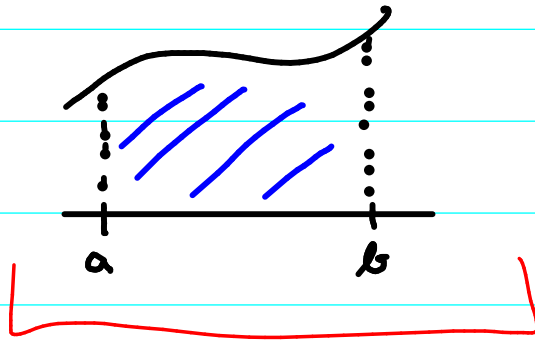
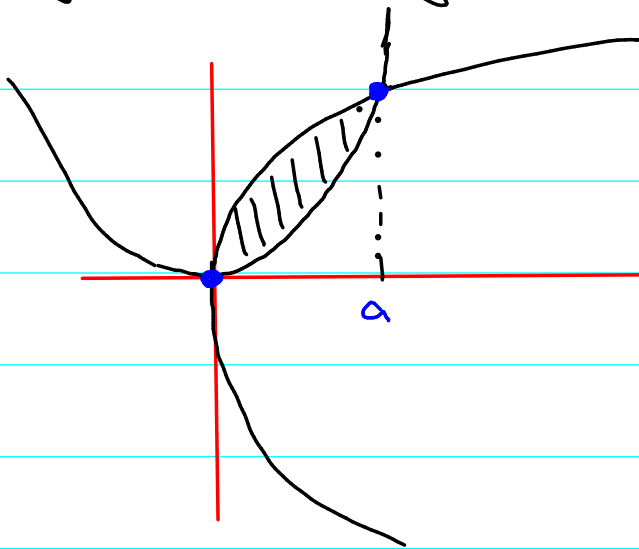


CVIČENÍ 15.5.2020

Obsah plochy:



- 1) Spočítejte obsah plochy omezené křivkami $ax=y^2$, $ay=x^2$, $a>0$;
přesněji obsah množiny $M = \{[x,y] \in \mathbb{R}^2 : \sqrt{ax} \geq y \geq \frac{1}{a}x^2\}$.



$$y = \sqrt{ax}$$

$$ax = y^2 = \left(\frac{1}{a}x^2\right)^2$$

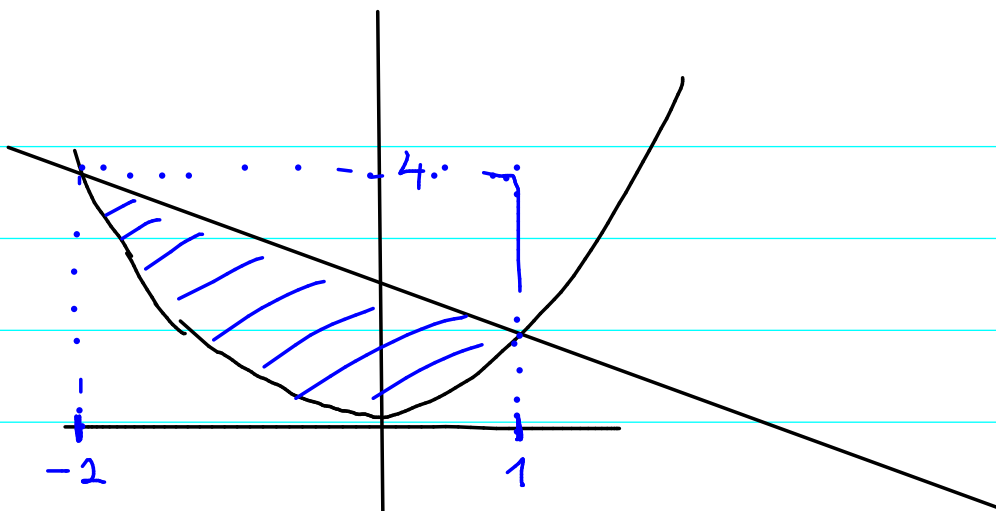
$$ax = \frac{1}{a^2}x^4 \Rightarrow \begin{cases} x=0 \\ a^3 = x^3 \Rightarrow x=a \end{cases}$$

$$\int_0^a \left(\sqrt{ax} - \frac{1}{a}x^2\right) dx = \left[\sqrt{a} \frac{2}{3} x^{\frac{3}{2}} - \frac{1}{a} \frac{1}{3} x^3 \right]_0^a = \sqrt{a} \frac{2}{3} a^{\frac{3}{2}} - \frac{1}{3} a^2$$

$$= \underline{\underline{\frac{1}{3}a^2}}$$

$$\boxed{2} \quad y = x^2, \quad x + y = 2$$

$$y = 2 - x$$


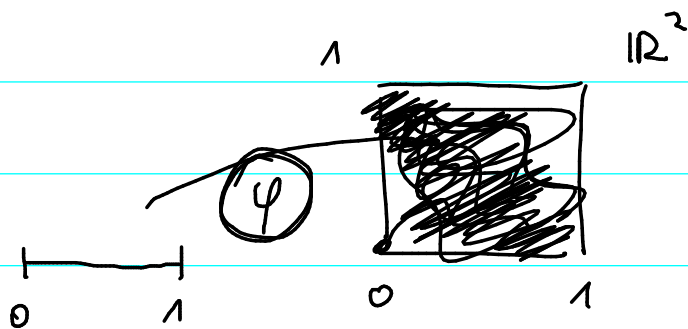


$$\begin{aligned} \int_{-2}^1 (2 - x - x^2) dx &= \left[2x - \frac{1}{2}x^2 - \frac{1}{3}x^3 \right]_{-2}^1 \\ &= \left(2 - \frac{1}{2} - \frac{1}{3} \right) - \left(-4 - 2 + \frac{8}{3} \right) = 8 - \frac{5}{6} - \frac{16}{6} = \frac{48 - 21}{6} = \frac{27}{6} = \frac{9}{2} \end{aligned}$$

Délka křivky. $L(\varphi) = \int_a^b \|\varphi'(t)\| dt.$

$$\varphi: [a, b] \rightarrow \mathbb{R}^m$$

$$t \in [a, b]$$



Peanoova křivka: spojitě $\varphi: [0, 1] \rightarrow \mathbb{R}^2$
 Autorem, že $\varphi([0, 1]) = [0, 1] \times [0, 1]$

$$\varphi: [a, b] \rightarrow \mathbb{R}^2$$

$$\varphi(t) = [\cos t, \sin t], t \in [0, 2\pi]$$

$$\varphi(t) = \text{---} \text{---}, t \in [0, 4\pi]$$

3] Vypočítejte délku křivky $y = x^{3/2}, x \in [0, 4]$

$$\varphi(t) = [t, t^{3/2}], t \in [0, 4] \quad \varphi'(t) = [1, \frac{3}{2} t^{1/2}]$$

$$\|\varphi'(t)\| = (1 + \frac{9}{4}t)^{1/2} \quad L(\varphi) = \int_0^4 \sqrt{1 + \frac{9}{4}t} dt$$

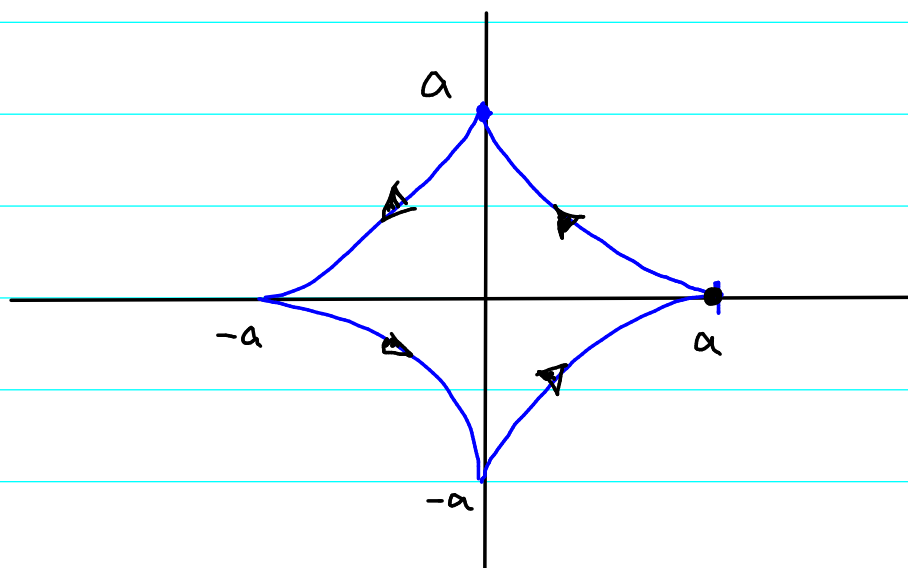
$$\sqrt{1 + \frac{9}{4}t} = z$$

$$t = (z^2 - 1) \frac{4}{9}$$

$$dt = \frac{8}{9} z dz$$

$$= \int_1^{\sqrt{10}} z \frac{8}{9} z dz = \left[\frac{8}{27} z^3 \right]_1^{\sqrt{10}} = \frac{8}{27} (10\sqrt{10} - 1)$$

4] Vypočítejte délku astroidy $\sqrt[3]{x^2} + \sqrt[3]{y^2} = \sqrt[3]{a^2}$, $a > 0$.



$$\varphi(t) = [a \cos^3 t, a \sin^3 t], \quad t \in [0, \pi]$$

$$\varphi'(t) = [3a \cos^2 t \cdot (-\sin t), 3a \sin^2 t \cdot \cos t]$$

$$\|\varphi'(t)\|^2 = 9a^2 \cos^4 t \sin^2 t + 9a^2 \sin^4 t \cos^2 t$$

$$= 9a^2 \cos^2 t \cdot \sin^2 t (\cos^2 t + \sin^2 t) = 9a^2 \cos^2 t \sin^2 t$$

$$L(\varphi) = \int_0^{\pi} 3a |\cos t \cdot \sin t| dt = 4 \int_0^{\pi/2} 3a \cos t \cdot \sin t dt$$

$$= 12a \left[-\frac{1}{2} \cos^2 t \right]_0^{\pi/2} = -12a \left(-\frac{1}{2} \cdot 1 \right) = \underline{6a}$$